

Exam Date	09/03/2023
Exam Time	2:30 PM - 3:30 PM
Subject	CHSL Exam 2022 Tier I

Section : English Language

**Q.1** Fill in the blank with an appropriate option.  
Illusions are usually related with \_\_\_\_\_ processes.

- Ans
- 1. oratory
  - 2. visual
  - 3. digital
  - 4. audio

Question ID : 264330124365  
Status : Answered  
Chosen Option : 2

**Q.2** Choose the word that can substitute the given group of words.  
One who offers one's services without being forced

- Ans
- 1. Scholar
  - 2. Altruist
  - 3. Skeptic
  - 4. Volunteer

Question ID : 264330124543  
Status : Answered  
Chosen Option : 4

**Q.3** Fill in the blank with the most suitable word.  
I \_\_\_\_\_ pay too much attention to the stories.

- Ans
- 1. wasn't
  - 2. hasn't
  - 3. didn't
  - 4. haven't

Question ID : 264330125835  
Status : Answered  
Chosen Option : 3

**Q.4** Choose the word that means the same as the given word.  
Ponderous

- Ans
- 1. Heavy
  - 2. Wondrous
  - 3. Bluff
  - 4. Unruly

Question ID : 264330124077  
Status : Answered  
Chosen Option : 2

**Q.5** Rearrange the parts of the sentence in correct order.  
P. to focus more on edible oils/oilseeds than on wheat  
Q. the MSP for wheat is up by 2 per cent while  
R. that of rapeseed-mustard is up by 8.6 per cent,  
S. perhaps indicating that the government wants

- Ans
- 1. RSPQ
  - 2. PSRQ
  - 3. PRQS
  - 4. QRSP

Question ID : 264330124066  
Status : Answered  
Chosen Option : 4

**Q.6** Find the part of the given sentence that has an error in it. If there is no error, choose 'No error'.  
In the five next years, the migration will surely stop.

- Ans
- 1. will surely stop.
  - 2. No error
  - 3. years, the migration
  - 4. In the five next

Question ID : 264330124057  
Status : Answered  
Chosen Option : 4

**Q.7** Fill in the blank with the most suitable word.  
We won an unprecedented pardon from \_\_\_\_\_-President Karzai, and Gulnaz was freed.

- Ans
- 1. then
  - 2. at time
  - 3. those
  - 4. later

Question ID : 264330125784  
Status : Not Attempted and Marked For Review  
Chosen Option : --

**Q.8** Select the correct passive form of the given sentence.  
The extremists have assassinated the President.

- Ans
- 1. The President has been assassinated by the extremists.
  - 2. The President had been assassinated by the extremists.
  - 3. The President is assassinated by the extremists.
  - 4. The President was assassinated by the extremists.

Question ID : 264330124627  
Status : Answered  
Chosen Option : 1

**Q.9 Find the part of the given sentence that has an error in it. If there is no error, choose 'No error'.**

**A study finds that the average staff cost at a public sector bank is high than that at its private sector counterpart.**

- Ans**
- 1. its private sector counterpart.
  - 2. a public sector bank is high than that at
  - 3. A study finds that the average staff cost at
  - 4. No error

Question ID : 264330124630  
Status : Answered  
Chosen Option : 2

**Q.10 Choose the incorrectly spelt word.**

- Ans**
- 1. Sober
  - 2. Hinder
  - 3. Prunke
  - 4. Tension

Question ID : 264330124073  
Status : Answered  
Chosen Option : 3

**Q.11 Choose the word that is opposite in meaning to the given word.  
Despondent**

- Ans**
- 1. Precise
  - 2. Reproach
  - 3. Despaired
  - 4. Hopeful

Question ID : 264330124564  
Status : Answered  
Chosen Option : 4

**Q.12 In the following question, out of the given four alternatives, select the alternative which best expresses the meaning of the Idiom/Phrase.  
Take your eye off the ball**

- Ans**
- 1. Take an advice from a wrong person
  - 2. Take someone for granted
  - 3. To stop paying attention for a moment
  - 4. Deteriorating and headed for complete disaster

Question ID : 264330124644  
Status : Answered  
Chosen Option : 3

**Q.13 In the following question, out of the given four alternatives, select the alternative which best expresses the meaning of the Idiom/Phrase.  
A bull market**

- Ans**
- 1. Market where prices are rising
  - 2. To boast
  - 3. A fertile field
  - 4. A market where cattle is traded

Question ID : 264330124071  
Status : Answered  
Chosen Option : 2

**Q.14** Choose the word that can substitute the given group of words.  
A person who is indifferent to pain and pleasures of life

- Ans  1. Vagabond  
 2. Stoic  
 3. Recluse  
 4. Amateur

Question ID : 264330124492  
Status : Answered  
Chosen Option : 2

**Q.15** Choose the sentence with no spelling error.

- Ans  1. Fine feathers do not make fine birds.  
 2. Figne feathers do not make fine brds.  
 3. Fine fthers do not make fine birds.  
 4. Fine fathears do not make fine birds.

Question ID : 264330124074  
Status : Answered  
Chosen Option : 1

**Q.16** Choose the word that is opposite in meaning to the given word.  
Amiss

- Ans  1. Marred  
 2. Impeccable  
 3. Vitiated  
 4. Gaily

Question ID : 264330124044  
Status : Not Attempted and Marked For Review  
Chosen Option : --

**Q.17** Choose the word that is opposite in meaning to the given word.  
Worried

- Ans  1. Withdraw  
 2. Proceed  
 3. Leisure  
 4. Unconcerned

Question ID : 264330124407  
Status : Answered  
Chosen Option : 4

**Q.18** Fill in the blank with an appropriate option.  
The makers of sports drinks spend tens to hundreds of millions of dollars \_\_\_\_\_ their products each year.

- Ans  1. varying  
 2. snacking  
 3. lingering  
 4. advertising

Question ID : 264330124028  
Status : Answered  
Chosen Option : 4

**Q.19** Select the correct indirect form of the given sentence.  
The father said to his daughter, "Your mother will be waiting for me."

- Ans**
- 1. The father told his daughter that her mother will be waiting for him.
  - 2. The father told his daughter that my mother would be waiting for him.
  - 3. The father told his daughter that her mother would be waiting for him.
  - 4. The father told his daughter that her mother was waiting for me.

Question ID : 264330124056  
Status : Answered  
Chosen Option : 3

**Q.20** Improve the underlined part of the sentence. Choose 'No improvement' as an answer if the sentence is grammatically correct.

Fashion is not something that exists in dresses only.

- Ans**
- 1. No improvement
  - 2. which exist on
  - 3. that exist of
  - 4. that existing at

Question ID : 264330124171  
Status : Answered  
Chosen Option : 2

**Comprehension:**

In the following passage some of the words have been deleted. Read the passage carefully and select the correct answer for the given blank out of the four alternatives.

First, the e-commerce industry has historically struggled with (1) \_\_\_\_\_ issues. The Internet has made it possible for customers to place (2) \_\_\_\_\_ from any location, but that convenience comes with a cost in (3) \_\_\_\_\_ of shipping costs and order fulfillment times. But by hosting their e-commerce sites on cloud computing platforms, merchants can offload (4) \_\_\_\_\_ of the server processing work. These third-party systems still (5) \_\_\_\_\_ full control over the look and feel of their online stores.

**SubQuestion No : 21**

**Q.21** Select the most appropriate option to fill in blank number 1.

- Ans**
- 1. flipping
  - 2. placing
  - 3. storing
  - 4. delivery

Question ID : 264330124060  
Status : Answered  
Chosen Option : 3

**Comprehension:**

In the following passage some of the words have been deleted. Read the passage carefully and select the correct answer for the given blank out of the four alternatives.  
First, the e-commerce industry has historically struggled with (1) \_\_\_\_\_ issues. The Internet has made it possible for customers to place (2) \_\_\_\_\_ from any location, but that convenience comes with a cost in (3) \_\_\_\_\_ of shipping costs and order fulfillment times. But by hosting their e-commerce sites on cloud computing platforms, merchants can offload (4) \_\_\_\_\_ of the server processing work. These third-party systems still (5) \_\_\_\_\_ full control over the look and feel of their online stores.

**SubQuestion No : 22**

**Q.22 Select the most appropriate option to fill in blank number 2.**

- Ans**
- 1. series
  - 2. systems
  - 3. orders
  - 4. locals

Question ID : 264330124061  
Status : Answered  
Chosen Option : 3

**Comprehension:**

In the following passage some of the words have been deleted. Read the passage carefully and select the correct answer for the given blank out of the four alternatives.  
First, the e-commerce industry has historically struggled with (1) \_\_\_\_\_ issues. The Internet has made it possible for customers to place (2) \_\_\_\_\_ from any location, but that convenience comes with a cost in (3) \_\_\_\_\_ of shipping costs and order fulfillment times. But by hosting their e-commerce sites on cloud computing platforms, merchants can offload (4) \_\_\_\_\_ of the server processing work. These third-party systems still (5) \_\_\_\_\_ full control over the look and feel of their online stores.

**SubQuestion No : 23**

**Q.23 Select the most appropriate option to fill in blank number 3.**

- Ans**
- 1. shifts
  - 2. terms
  - 3. tags
  - 4. firms

Question ID : 264330124062  
Status : Answered  
Chosen Option : 2

**Comprehension:**

In the following passage some of the words have been deleted. Read the passage carefully and select the correct answer for the given blank out of the four alternatives.  
First, the e-commerce industry has historically struggled with (1) \_\_\_\_\_ issues. The Internet has made it possible for customers to place (2) \_\_\_\_\_ from any location, but that convenience comes with a cost in (3) \_\_\_\_\_ of shipping costs and order fulfillment times. But by hosting their e-commerce sites on cloud computing platforms, merchants can offload (4) \_\_\_\_\_ of the server processing work. These third-party systems still (5) \_\_\_\_\_ full control over the look and feel of their online stores.

**SubQuestion No : 24**

**Q.24 Select the most appropriate option to fill in blank number 4.**

- Ans**
- 1. must
  - 2. much
  - 3. more
  - 4. many

Question ID : 264330124063  
Status : Answered  
Chosen Option : 2

**Comprehension:**

In the following passage some of the words have been deleted. Read the passage carefully and select the correct answer for the given blank out of the four alternatives.  
First, the e-commerce industry has historically struggled with (1)\_\_\_\_\_ issues. The Internet has made it possible for customers to place (2) \_\_\_\_\_ from any location, but that convenience comes with a cost in (3) \_\_\_\_\_ of shipping costs and order fulfillment times. But by hosting their e-commerce sites on cloud computing platforms, merchants can offload (4) \_\_\_\_\_ of the server processing work. These third-party systems still (5) \_\_\_\_\_ full control over the look and feel of their online stores.

**SubQuestion No : 25**

**Q.25 Select the most appropriate option to fill in blank number 5.**

- Ans**
- 1. fumigate
  - 2. discard
  - 3. placate
  - 4. retain

Question ID : 264330124064  
Status : Answered  
Chosen Option : 4

**Section : General Intelligence**

**Q.1 In a certain code language, 'CAPTURES' is coded as '24111206182219', 'DECORATE' is coded as '23524159175'. What is the code for 'EDUCATOR' in that code language?**

- Ans**
- 1. 2246326201218
  - 2. 2246322601218
  - 3. 2246326201219
  - 4. 224632620218

Question ID : 264330126748  
Status : Answered  
Chosen Option : 1

**Q.2 After arranging the given words according to dictionary order, which word will come at 'Fourth' position?**

- 1. Convert
- 2. Convex
- 3. Convect
- 4. Convent
- 5. Convict

- Ans**
- 1. Convert
  - 2. Convent
  - 3. Convict
  - 4. Convex

Question ID : 264330127296  
Status : Answered  
Chosen Option : 4

**Q.3** In the following question below are given some statements followed by some conclusions based on those statements. Taking the given statements to be true even if they seem to be at variance from commonly known facts. Read all the conclusions and then decide which of the given conclusion logically follows the given statements.

Statements:

I. All cherry are pink.

II. Some blue are pink.

Conclusion:

I. Some blue are not cherry.

II. All pink are cherry.

III. Some pink are cherry.

- Ans
- 1. All conclusion follows
  - 2. Only conclusion III follows
  - 3. Neither conclusion follows
  - 4. Both conclusions I and II follows

Question ID : 264330126756

Status : Answered

Chosen Option : 2

**Q.4** Words given on the left side of (::) are related with each other by some Logic/Rule /Relation. Select the missing word/word pair on the right side of (::) from the given alternatives based on the same Logic/Rule/Relation.

Yuan : China :: Yen : ?

- Ans
- 1. Japan
  - 2. Srilanka
  - 3. Pakistan
  - 4. United Kingdom

Question ID : 264330126331

Status : Answered

Chosen Option : 1

**Q.5** If a mirror is placed on the line AB, then out of the option figures which figure will be the right image of the question figure?



Ans

- 1.
- 2.
- 3.
- 4.

Question ID : 264330127287

Status : Answered

Chosen Option : 2



**Q.6** Words given on the left side of (::) are related with each other by some Logic/Rule /Relation. Select the missing word/word pair on the right side of (::) from the given alternatives based on the same Logic/Rule/Relation.

Dog : Bitch :: Bull : ?

- Ans
- 1. Vixen
  - 2. Bee
  - 3. Cow
  - 4. Goose

Question ID : 264330127225  
Status : Answered  
Chosen Option : 3

**Q.7** By interchanging the given two signs which of the following equation will not be correct?

+ and ÷

I.  $27 \div 3 - 18 \times 3 + 9 = 24$

II.  $12 \div 8 \times 12 + 16 - 7 = 19$

- Ans
- 1. Both I and II
  - 2. Only II
  - 3. Neither I nor II
  - 4. Only I

Question ID : 264330126840  
Status : Answered  
Chosen Option : 2

**Q.8** Three of the four group of words are alike in some manner. Select the odd group of words.

- Ans
- 1. (Factory, Garage, Casino)
  - 2. (Engineer, Servant, Grocer)
  - 3. (Sailor, Doctor, Painter)
  - 4. (Mechanic, Astronomer, Warrior)

Question ID : 264330127305  
Status : Answered  
Chosen Option : 1

**Q.9** Select the option in which the numbers shares the same relationship in set as that shared by the numbers in the given set. (NOTE: Operations should be performed on the whole numbers, without breaking down the numbers into its constituent digits. E.g. 13 – Operations on 13 such as adding /subtracting /multiplying etc. to 13 can be performed. Breaking down 13 into 1 and 3 and then performing mathematical operations on 1 and 3 is not allowed)

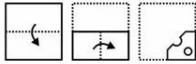
(18, 9, 36)

(36, 18, 72)

- Ans
- 1. (46, 33, 132)
  - 2. (24, 12, 36)
  - 3. (58, 29, 118)
  - 4. (32, 16, 64)

Question ID : 264330127217  
Status : Answered  
Chosen Option : 4

**Q.10** A piece of paper is folded and punched as shown below in the question figures, indicate how it will appear when opened?

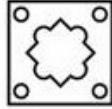


**Ans**

✗ 1.




✓ 2.



✗ 3.

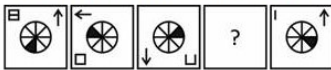


✗ 4.



Question ID : 264330126711  
 Status : Answered  
 Chosen Option : 2

**Q.11** Select the figure from the given options that can replace the question mark (?) in the following series.



**Ans**

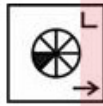
✗ 1.



✗ 2.



✓ 3.

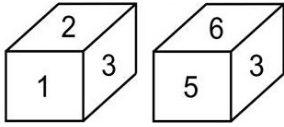


✗ 4.



Question ID : 264330126758  
 Status : Answered  
 Chosen Option : 3

**Q.12** Two different positions of the same dice are shown, the six faces of which are numbered from 1 to 6. Select the number that will be on the face opposite to the one having '4'.



- Ans**
- 1. 3
  - 2. 2
  - 3. 1
  - 4. 5

Question ID : 264330127607  
Status : Answered  
Chosen Option : 1

**Q.13** Select the option that is related to the fifth number in the same way as the first number is related to the second number and third number is related to fourth number.  
5432 : 2345 :: 6192 : 1269 :: 7835 : ?

- Ans**
- 1. 3587
  - 2. 5378
  - 3. 5387
  - 4. 3578

Question ID : 264330127066  
Status : Answered  
Chosen Option : 4

**Q.14** Words given on the left side of (::) are related with each other by some Logic/Rule /Relation. Select the missing word/word pair on the right side of (::) from the given alternatives based on the same Logic/Rule/Relation.  
Pen : Write :: Spade : ?

- Ans**
- 1. Draw
  - 2. Dig
  - 3. Grind
  - 4. Magnify

Question ID : 264330127000  
Status : Answered  
Chosen Option : 2

**Q.15** In a certain code language, 'RAMEN' is coded as 'RIQEV'. What is the code for 'MODEL' in that code language?

- Ans**
- 1. PIHSQ
  - 2. PHHHR
  - 3. PHHSQ
  - 4. PIISR

Question ID : 264330126747  
Status : Answered  
Chosen Option : 1

Q.16 A series is given with one term missing. Select the correct alternative from the given ones that will complete the series.  
TDS, SIJ, RNA, QSR, ?

- Ans
- 1. POI
  - 2. PYM
  - 3. P XK
  - 4. PXI

Question ID : 264330126751  
Status : Answered  
Chosen Option : 4

Q.17 In the following question, select the missing number from the given series.  
20, 22, 26, 32, 40, ?

- Ans
- 1. 48
  - 2. 54
  - 3. 52
  - 4. 50

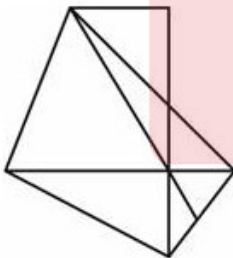
Question ID : 264330126332  
Status : Answered  
Chosen Option : 4

Q.18 If  $27 A 11 A 8 = 8$  and  $48 A 37 A 2 = 9$ , then  $56 A 5 A 3 = ?$

- Ans
- 1. 48
  - 2. 45
  - 3. 47
  - 4. 46

Question ID : 264330126334  
Status : Answered  
Chosen Option : 1

Q.19 How many triangles are there in the given figure?



- Ans
- 1. 11
  - 2. 13
  - 3. 12
  - 4. 14

Question ID : 264330127084  
Status : Answered  
Chosen Option : 2

Q.20 M is the father of L. R is the father of M. Q is the husband of S. L is the brother of Q.  
How is S related to M?

- Ans
- 1. Mother
  - 2. Daughter
  - 3. Niece
  - 4. Daughter in law

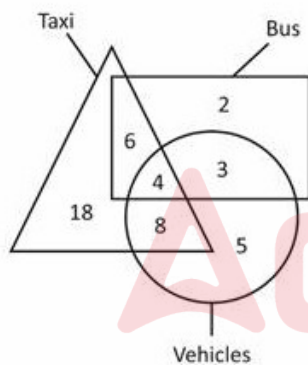
Question ID : 264330126752  
Status : Answered  
Chosen Option : 4

Q.21 In the following question, select the odd letter/letters from the given alternatives.

- Ans
- 1. OQT
  - 2. ACF
  - 3. XZC
  - 4. PRV

Question ID : 264330126754  
Status : Answered  
Chosen Option : 4

Q.22 What is the total number of buses?



- Ans
- 1. 13
  - 2. 14
  - 3. 7
  - 4. 15

Question ID : 264330127088  
Status : Answered  
Chosen Option : 4

**Q.23** Select the option in which the numbers shares the same relationship in set as that shared by the numbers in the given set.

(NOTE: Operations should be performed on the whole numbers, without breaking down the numbers into its constituent digits.

E.g.13 – Operations on 13 such as adding /subtracting /multiplying etc. to 13 can be performed. Breaking down 13 into 1 and 3 and then performing mathematical operations on 1 and 3 is not allowed)

(56, 121, 242)

(78, 165, 726)

**Ans** ✓ 1. (36, 99, 198)

✗ 2. (44, 88, 166)

✗ 3. (62, 98, 187)

✗ 4. (28, 110, 220)

Question ID : 264330126743

Status : Answered

Chosen Option : 1

**Q.24** Select the option in which the numbers shares the same relationship in set as that shared by the numbers in the given set. (NOTE: Operations should be performed on the whole numbers, without breaking down the numbers into its constituent digits.

E.g.13 – Operations on 13 such as adding /subtracting /multiplying etc. to 13 can be performed. Breaking down 13 into 1 and 3 and then performing mathematical operations on 1 and 3 is not allowed)

(59, 118, 236)

(64, 128, 256)

**Ans** ✓ 1. (82, 164, 328)

✗ 2. (63, 126, 242)

✗ 3. (44, 88, 186)

✗ 4. (37, 74, 138)

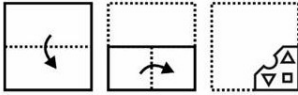
Question ID : 264330126992

Status : Answered

Chosen Option : 1



**Q.25** A piece of paper is folded and punched as shown below in the question figures. From the given answer figures, indicate how it will appear when opened?



**Ans**

✓ 1.



✗ 2.



✗ 3.



✗ 4.



Question ID : 264330126961  
 Status : Answered  
 Chosen Option : 1

**Section : Quantitative Aptitude**

**Q.1** Average weight of 15 persons is 30 kg. A new person whose weight is 78 kg joins the group. What will be the average weight of 16 persons?

**Ans**

✗ 1. 31.5 kg

✗ 2. 34 kg

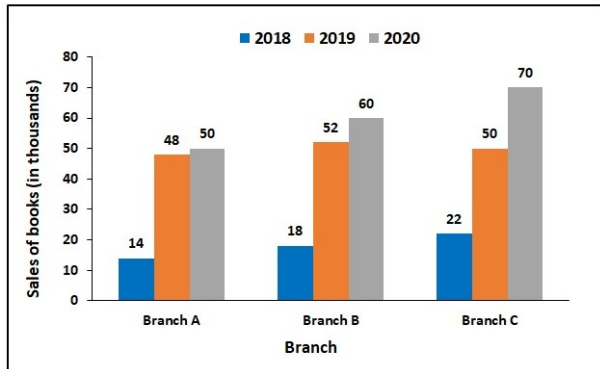
✗ 3. 32 kg

✓ 4. 33 kg

Question ID : 264330126470  
 Status : Answered  
 Chosen Option : 4

**Q.2** The following bar graph shows the sales of books (in thousands) from 3 branches of a company in three consecutive years 2018, 2019 and 2020.

What is the ratio of the total sales of branch A for the year 2018 to the total sales of branch C for the year 2020?



- Ans**
- 1. 5 : 1
  - 2. 4 : 3
  - 3. 1 : 5
  - 4. 1 : 1

Question ID : 264330128386  
Status : Answered  
Chosen Option : 3

**Q.3** If 5A72B is divisible by 11, then what is the value of B – A?

- Ans**
- 1. 1
  - 2. 4
  - 3. 3
  - 4. 2

Question ID : 264330127855  
Status : Answered  
Chosen Option : 1

**Q.4** If  $\tan x = \frac{10}{17}$ , then what is the value of  $\sin X$ ?

- Ans**
- 1.  $\frac{7}{\sqrt{389}}$
  - 2.  $\frac{9}{\sqrt{389}}$
  - 3.  $\frac{10}{\sqrt{389}}$
  - 4.  $\frac{17}{\sqrt{389}}$

Question ID : 264330126472  
Status : Answered  
Chosen Option : 3



**Q.5** The average age of a class of 6 girls is  $x$  years. Four new girls having ages  $x - 2$ ,  $x + 4$ ,  $x + 8$  and  $x + 10$  joins the class. What is the new average age of the class?

- Ans**
- 1.  $x - 2$
  - 2.  $x + 5$
  - 3.  $x + 1$
  - 4.  $x + 2$

Question ID : 264330127742  
Status : Answered  
Chosen Option : 4

**Q.6**  $\frac{1}{2}$  of a certain sum is lent at 20 percent rate of interest.  $\frac{2}{5}$  of the remaining sum is lent at 25 percent rate of interest. The remaining sum is lent at 10 percent rate of interest. If the simple interest received on the total sum for 2 years is Rs. 360, then what is the sum?

- Ans**
- 1. Rs. 1000
  - 2. Rs. 1400
  - 3. Rs. 1200
  - 4. Rs. 800

Question ID : 264330128297  
Status : Not Attempted and Marked For Review  
Chosen Option : --

**Q.7** Angle subtended by a chord AB on the circumference of a circle is 90 degree. If length of chord AB is 16 cm, then what will be radius of this circle?

- Ans**
- 1. 10 cm
  - 2. 12 cm
  - 3. 9 cm
  - 4. 8 cm

Question ID : 264330126471  
Status : Answered  
Chosen Option : 1

**Q.8** If  $P : Q = 2 : 3$ ,  $Q : R = 4 : 5$  and  $R : S = 2 : 1$ , then what is the value of  $P : R : S$ ?

- Ans**
- 1. 9 : 10 : 15
  - 2. 16 : 30 : 15
  - 3. 10 : 5 : 4
  - 4. 12 : 25 : 10

Question ID : 264330127746  
Status : Answered  
Chosen Option : 2

**Q.9** If  $K + \frac{1}{K} + 2 = 0$  and  $K < 0$ , then what is the value of  $K^{17} + \frac{1}{K^{11}}$  ?

- Ans**
- 1. -17
  - 2. 0
  - 3. -2
  - 4. -1

Question ID : 264330127752  
Status : Answered  
Chosen Option : 3

**Q.10** Two identical circles touch each other externally at point Z. XY is a direct common tangent, which touches the circles at X and Y respectively. What is the  $\angle XYZ$ ?

- Ans**
- 1. 80 degree
  - 2. 95 degree
  - 3. 85 degree
  - 4. 90 degree

Question ID : 264330127749  
Status : Answered  
Chosen Option : 4

**Q.11** In  $\triangle DEF$ , M and N are the points on sides DE and DF respectively. MN is parallel to EF and  $MN : EF = 2 : 5$ . If  $DE = 60$  cm, then what is the length of ME?

- Ans**
- 1. 36 cm
  - 2. 54 cm
  - 3. 48 cm
  - 4. 24 cm

Question ID : 264330128100  
Status : Answered  
Chosen Option : 1

**Q.12** X alone can complete a work in 18 days and Y alone can do the same work in half time of the time taken by X. Working together what part of the same work they can complete in a day?

- Ans**
- 1.  $\frac{1}{4}$
  - 2.  $\frac{1}{3}$
  - 3.  $\frac{1}{6}$
  - 4.  $\frac{1}{5}$

Question ID : 264330128289  
Status : Answered  
Chosen Option : 3

**Q.13** On Selling a watch at  $\frac{4}{5}$  of the marked price there is a loss of 10 percent. What will be the ratio of the marked price and cost price of the watch?

- Ans**
- 1. 9 : 8
  - 2. 8 : 5
  - 3. 9 : 5
  - 4. 6 : 5

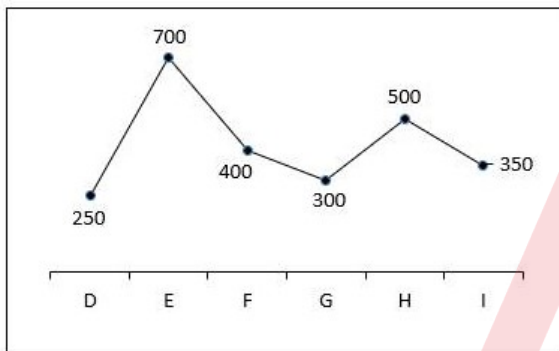
Question ID : 264330128068  
Status : Answered  
Chosen Option : 2

Q.14 What is the value of  $\sin^2 21 + \sin^2 69$ ?

- Ans
- 1. 2
  - 2. 0.5
  - 3. 1
  - 4. 0

Question ID : 264330128282  
Status : Answered  
Chosen Option : 3

Q.15 The line chart given below shows the salary of 6 employees of a company.



What is the ratio of salary of F to the salary of H?

- Ans
- 1. 4 : 5
  - 2. 5 : 4
  - 3. 3 : 2
  - 4. 5 : 6

Question ID : 264330128010  
Status : Answered  
Chosen Option : 1

Q.16 What is the value of  $\frac{\frac{1}{2} + \frac{3}{4} \div \frac{1}{4} + \frac{3}{4} \div \frac{1}{2} + \frac{1}{4}}{\frac{2}{3} \times \frac{1}{4} \div \frac{1}{2} - \frac{1}{2} \div \frac{3}{4} \times \frac{1}{4}}$ ?

- Ans
- 1.  $126/5$
  - 2.  $49/8$
  - 3.  $89/6$
  - 4.  $116/5$

Question ID : 264330127756  
Status : Answered  
Chosen Option : 1

**Q.17** The circumference of the two circles is 77 cm and 154 cm respectively. What is the difference between their radii?

- Ans**
- 1. 15 cm
  - 2. 16 cm
  - 3. 12.25 cm
  - 4. 13.25 cm

Question ID : 264330127741  
Status : Answered  
Chosen Option : 3

**Q.18** What is the value of  $(a + b + 2c)(a^2 + b^2 + 4c^2 - ab - 2bc - 2ca)$ ?

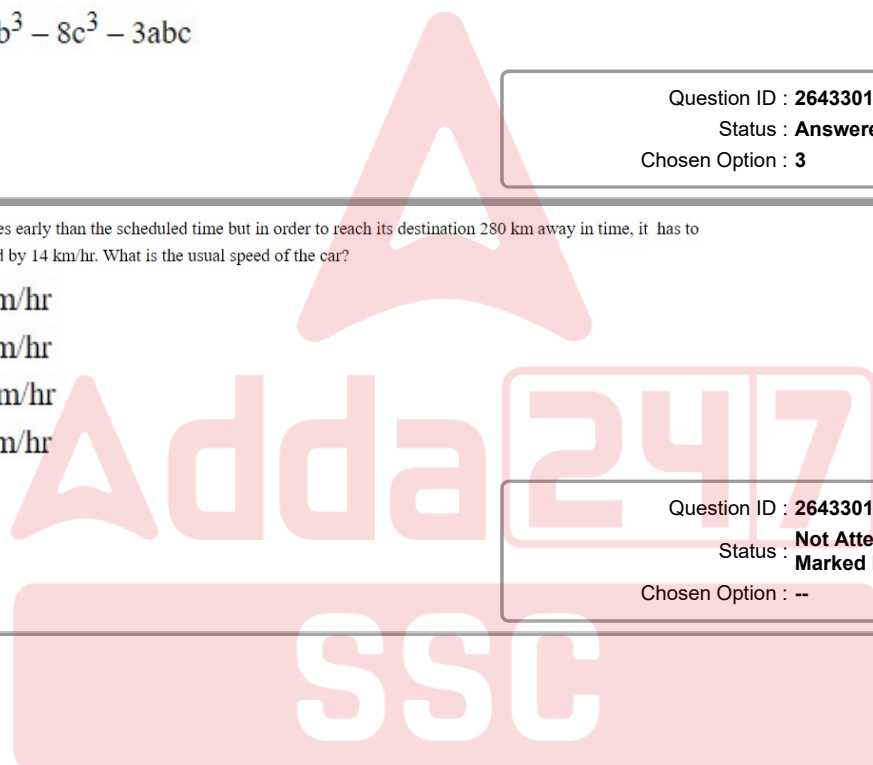
- Ans**
- 1.  $a^3 + b^3 + 4c^3 - 6abc$
  - 2.  $a^3 - b^3 - c^3 - 6abc$
  - 3.  $a^3 + b^3 + 8c^3 - 6abc$
  - 4.  $a^3 - b^3 - 8c^3 - 3abc$

Question ID : 264330128079  
Status : Answered  
Chosen Option : 3

**Q.19** A car left 60 minutes early than the scheduled time but in order to reach its destination 280 km away in time, it has to slow its usual speed by 14 km/hr. What is the usual speed of the car?

- Ans**
- 1. 77 km/hr
  - 2. 66 km/hr
  - 3. 70 km/hr
  - 4. 63 km/hr

Question ID : 264330127740  
Status : Not Attempted and Marked For Review  
Chosen Option : --



**Q.20** The table given below shows the production of bike and truck by five companies.

Companies	Production	
	Bike	Truck
D	700	500
E	450	300
F	500	200
G	250	600
H	300	650

A1 = The difference between the total production of bikes and trucks by all the 5 companies.

A2 = The average production of bike by company D, F and H.

What is the value of  $(A2/A1)$ ?

- Ans**
- 1. 10
  - 2. 5
  - 3. 50
  - 4. 1

Question ID : 264330128313  
Status : Answered  
Chosen Option : 1

**Q.21** What is the value of  $(1 + \tan \theta - \sec \theta)(1 + \cot \theta + \operatorname{cosec} \theta)$ ?

- Ans**
- 1. -1
  - 2. 0
  - 3. 2
  - 4. 1

Question ID : 264330127758  
Status : Answered  
Chosen Option : 3

**Q.22** Out of two numbers, 20 percent of the smaller number is equal to 14 percent of the larger number. If the sum of both the numbers is 8942, then what is the value of the larger number?

- Ans**
- 1. 5260
  - 2. 5040
  - 3. 5160
  - 4. 4920

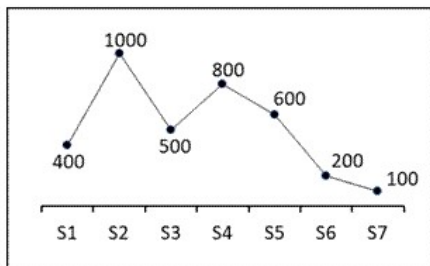
Question ID : 264330127744  
Status : Answered  
Chosen Option : 1

**Q.23** Side of an equilateral triangle is 12 cm. What will be the radius of incircle of this equilateral triangle?

- Ans**
- 1.  $2\sqrt{3}$  cm
  - 2.  $4\sqrt{3}$  cm
  - 3. 3 cm
  - 4. 4 cm

Question ID : 264330127751  
Status : Answered  
Chosen Option : 1

Q.24 The line chart given below shows the number of girls in 7 schools.



Number of girls in S1 is how much percent less than the number of girls in S2?

- Ans
- 1. 80 percent
  - 2. 100 percent
  - 3. 150 percent
  - 4. 60 percent

Question ID : 264330128087  
Status : Answered  
Chosen Option : 4

Q.25 Ram purchases two watches for Rs.3,500. By selling one watch at a profit of 25 percent and the other at a loss of 10 percent he neither earns profit nor suffers loss in the whole transaction. What is the cost price of each watch?

- Ans
- 1. Rs. 1000 and Rs. 2500
  - 2. Rs. 1500 and Rs. 2000
  - 3. Rs. 1250 and Rs. 2250
  - 4. Rs. 1500 and Rs. 1720

Question ID : 264330128070  
Status : Answered  
Chosen Option : 1

Section : General awareness

Q.1 Lingaraja Temple is situated in which of the following states of India?

- Ans
- 1. Odisha
  - 2. Maharashtra
  - 3. Karnataka
  - 4. Tamil Nadu

Question ID : 264330124810  
Status : Answered  
Chosen Option : 1

Q.2 \_\_\_\_\_ was the leading producing State of manganese ore accounting for 33% of total production during 2019-20 in India.

- Ans
- 1. Odisha
  - 2. Madhya Pradesh
  - 3. Maharashtra
  - 4. Karnataka

Question ID : 264330124971  
Status : Not Answered  
Chosen Option : --

Q.3 The Mahanadi basin does not extend over which state?

- Ans
- 1. Chhattisgarh
  - 2. Odisha
  - 3. Jharkhand
  - 4. Karnataka

Question ID : 264330125398  
Status : Answered  
Chosen Option : 3

Q.4 Which of the following disease is not caused by a mosquito bite?

- Ans
- 1. Hepatitis
  - 2. Malaria
  - 3. Elephantiasis
  - 4. Dengue

Question ID : 264330125393  
Status : Marked For Review  
Chosen Option : 3

Q.5 Which indigenous aircraft carrier was delivered to Indian Navy on July 28, 2022?

- Ans
- 1. INS Vikrant
  - 2. INS Arihant
  - 3. INS Vikramaditya
  - 4. INS Shivaji

Question ID : 264330125389  
Status : Answered  
Chosen Option : 1

Q.6 herSTART, an initiative implemented by the Gujarat University Startup and Entrepreneurship, was launched by \_\_\_\_\_ in October 2022.

- Ans
- 1. Finance Minister Nirmala Sitharaman
  - 2. Prime Minister Narendra Modi
  - 3. President Draupadi Murmu
  - 4. Defence Minister Rajnath Singh

Question ID : 264330125388  
Status : Not Answered  
Chosen Option : --

Q.7 In which of the following ways of heat transfer no medium is required?

- Ans
- 1. Radiation and Conduction both
  - 2. Radiation
  - 3. Conduction
  - 4. Convection

Question ID : 264330124842  
Status : Answered  
Chosen Option : 1

Q.8 The preamble of the Indian constitution is borrowed from the constitution of \_\_\_\_\_.

Ans  1. USSR (Present Russia )

2. United States of America

3. Britain

4. Canada

Question ID : 264330124854

Status : Answered

Chosen Option : 2

Q.9 Which of the following statements is/are NOT correct?

I. Force per unit volume is called pressure.

II. Liquids can exert pressure on walls of containers.

III. Force acting on an object can cause a change in its state of motion but not its shape.

Ans  1. Only I and II

2. Only I and III

3. Only III

4. I, II and III

Question ID : 264330124844

Status : Answered

Chosen Option : 2

Q.10 Dhuska is the most popular food item of state of \_\_\_\_\_.

Ans  1. Andhra Pradesh

2. Jharkhand

3. Kerala

4. Punjab

Question ID : 264330125461

Status : Not Answered

Chosen Option : --

Q.11 Who among the following devised a policy that came to be known as the Doctrine of Lapse?

Ans  1. Lord Dalhousie

2. Lord Minto

3. Lord Hastings

4. Lord Cornwallis

Question ID : 264330124849

Status : Answered

Chosen Option : 1

Q.12 Which of the following shortcut key is used to save a file in MS-Word 365?

Ans  1. Alt + F

2. Alt + S

3. Ctrl + F

4. Ctrl + S

Question ID : 264330124834

Status : Answered

Chosen Option : 4



Q.13 Which country will host the ICC Men's Cricket World Cup 2023?

- Ans
- 1. West Indies
  - 2. Australia
  - 3. India
  - 4. South Africa

Question ID : 264330125330  
Status : Marked For Review  
Chosen Option : 3

Q.14 For which of the following films, has Akshay Kumar won a National award?

- Ans
- 1. Mission Mangal
  - 2. Bell Bottom
  - 3. Raksha Bandhan
  - 4. Rustom

Question ID : 264330124976  
Status : Answered  
Chosen Option : 1

Q.15 In which year was the Arms Act disallowing Indians from possessing arms passed?

- Ans
- 1. 1876
  - 2. 1877
  - 3. 1875
  - 4. 1878

Question ID : 264330125175  
Status : Answered  
Chosen Option : 1

Q.16 Which among the following states ranked 1st amongst "Achievers" states in the Logistics Ease Across Different States (LEADS) Report 2022?

- Ans
- 1. Maharashtra
  - 2. Tamil Nadu
  - 3. Assam
  - 4. Andhra Pradesh

Question ID : 264330125587  
Status : Answered  
Chosen Option : 2

Q.17 Which five-year plan was based on the ideas of Mahalanobis?

- Ans
- 1. Fourth five-year plan
  - 2. First five-year plan
  - 3. Third five-year plan
  - 4. Second five-year plan

Question ID : 264330124840  
Status : Not Answered  
Chosen Option : --

Q.18 How many gold medals did India win in 2020 Tokyo Olympic Games?

- Ans  1. 3  
 2. 0  
 3. 2  
 4. 1

Question ID : 264330125105  
Status : Not Answered  
Chosen Option : --

Q.19 Which Indian javelin thrower has been suspended in 2022 (till 2025) for doping?

- Ans  1. Kashinath Naik  
 2. Neeraj Chopra  
 3. Devendra Jhajharia  
 4. Shivpal Singh

Question ID : 264330125407  
Status : Not Answered  
Chosen Option : --

Q.20 Who was the first Indian Army officer to be promoted to the rank of field marshal?

- Ans  1. Karam Singh  
 2. Sam Manekshaw  
 3. K M Cariappa  
 4. Vikram Batra

Question ID : 264330125402  
Status : Answered  
Chosen Option : 2

Q.21 In the higher latitudes (50° – 70°) of Northern hemisphere the spectacular Coniferous forests are found. These are also called as \_\_\_\_\_.

- Ans  1. Veld  
 2. Tundra  
 3. Taiga  
 4. Llanos

Question ID : 264330125172  
Status : Not Answered  
Chosen Option : --

Q.22 Little Andaman in the south is separated from the Nicobar Islands by the \_\_\_\_\_.

- Ans  1. 10 Degree Channel  
 2. 7 Degree Channel  
 3. 9 Degree Channel  
 4. 8 Degree Channel

Question ID : 264330125595  
Status : Answered  
Chosen Option : 1

**Q.23** A \_\_\_\_\_ account is one which is maintained by an Indian Bank in the foreign countries usually in the currency of that country for the purpose of carrying out transactions there.

- Ans**
1. VOSTRO
  2. LIBOR
  3. NOSTRO
  4. MIBOR

Question ID : 264330125391  
Status : Not Answered  
Chosen Option : --

**Q.24** The 42nd Amendment Act, 1976 of the Indian constitution has added which of the following in the preamble to the constitution?

- Ans**
1. Sovereign
  2. Secular
  3. Republic
  4. Democratic

Question ID : 264330125178  
Status : Not Answered  
Chosen Option : --

**Q.25** Which of the following is NOT an output device?

- Ans**
1. Monitor
  2. Dot matrix printer
  3. Bar code reader
  4. Plotter

Adda247

SSC